



Name : _____


Date : _____



1



2



3

$$\begin{array}{c} \text{4 chili peppers} \\ + \text{2 chili peppers} \\ = \square \end{array}$$

$$\begin{array}{c} \text{3 chili peppers} \\ + \text{2 chili peppers} \\ = \square \end{array}$$

$$\begin{array}{c} \text{4 chili peppers} \\ + \text{3 chili peppers} \\ = \square \end{array}$$

$$\begin{array}{c} \text{2 chili peppers} \\ + \text{2 chili peppers} \\ = \square \end{array}$$